

Name

Class



www.MathsTeacherHub.com

Pythagoras theorem

(9 – 1) Topic booklet

HIGHER

These questions have been collated from previous years GCSE Mathematics papers.

You must have: Ruler graduated in centimetres and millimetres, protractor, pair of compasses, pen, HB pencil, eraser.

Total Marks

Instructions

- Use **black** ink or ball-point pen.
- Fill in the boxes** at the top of this page with your name, centre number and candidate number.
- Answer **all** questions.
- Answer the questions in the spaces provided
– *there may be more space than you need.*
- Diagrams are NOT accurately drawn, unless otherwise indicated.
- You must **show all your working out.**
- If the question is a **1F** question you are not allowed to use a calculator.
- If the question is a **2F** or a **3F** question, you may use a calculator to help you answer.

Information

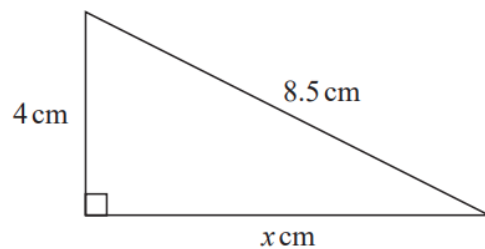
- The marks for **each** question are shown in brackets
– *use this as a guide as to how much time to spend on each question.*

Advice

- Read each question carefully before you start to answer it.
- Keep an eye on the time.
- Try to answer every question.
- Check your answers if you have time at the end.

Answer ALL questions
Write your answers in the space provided.
You must write down all the stages in your working.

1 Here is a right-angled triangle.



Work out the value of x .

$x = \dots\dots\dots$

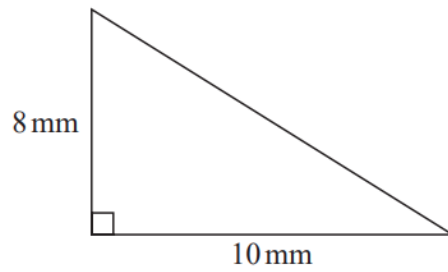
4 Triangle ABC has perimeter 20 cm.

$$AB = 7 \text{ cm.}$$

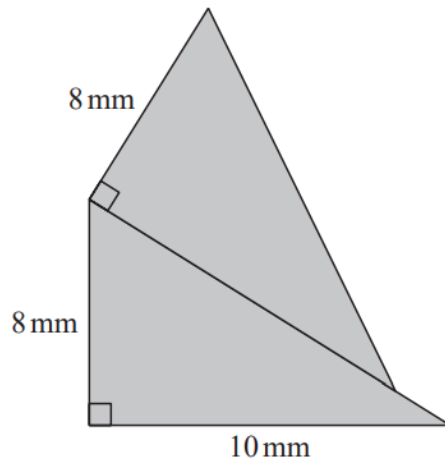
$$BC = 4 \text{ cm.}$$

By calculation, deduce whether triangle ABC is a right-angled triangle.

5 Here is a right-angled triangle.



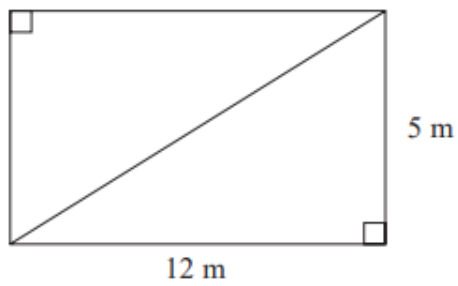
The shaded shape below is made from two of these triangles.



Work out the perimeter of the shaded shape.
Give your answer correct to 3 significant figures.

..... mm

5 This rectangular frame is made from 5 straight pieces of metal.

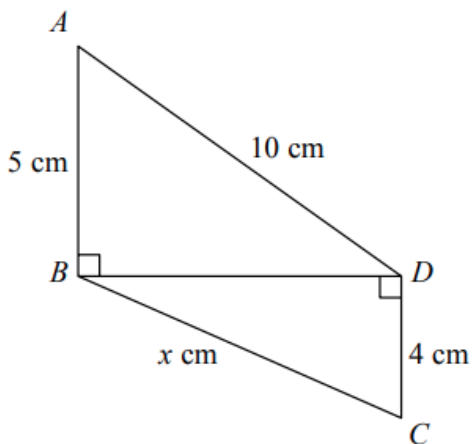


The weight of the metal is 1.5 kg per metre.

Work out the total weight of the metal in the frame.

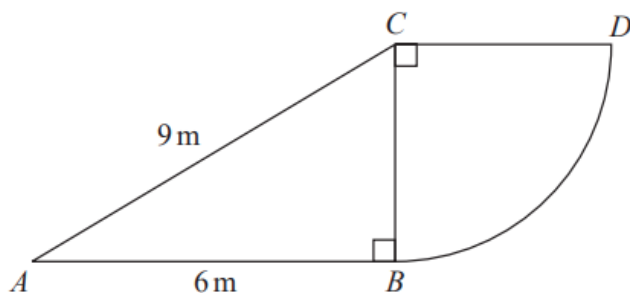
..... kg

6 Triangles ABD and BCD are right-angled triangles.



Work out the value of x .
Give your answer correct to 2 decimal places.

7 The diagram shows a right-angled triangle and a quarter circle.

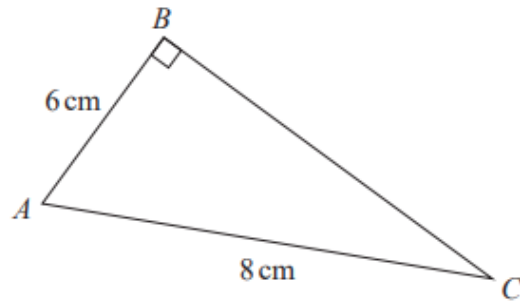


The right-angled triangle ABC has angle $ABC = 90^\circ$
The quarter circle has centre C and radius CB .

Work out the area of the quarter circle.
Give your answer correct to 3 significant figures.
You must show all your working.

..... m^2

8 ABC is a right-angled triangle.



Here is Sarah's method to find the length of BC .

$$\begin{aligned}BC^2 &= AB^2 + AC^2 \\ &= 6^2 + 8^2 \\ &= 100 \\ BC &= 10\end{aligned}$$

What mistake has Sarah made in her method?

.....

.....

.....

(1)

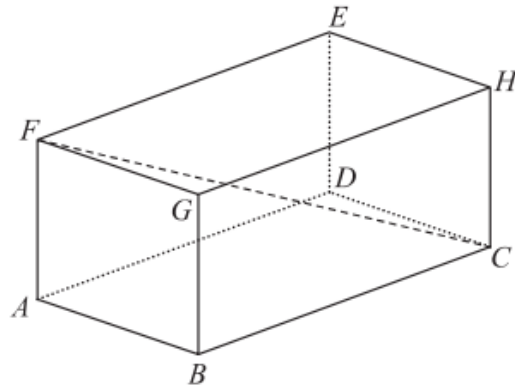
- 8** A square, with sides of length x cm, is inside a circle.
Each vertex of the square is on the circumference of the circle.

The area of the circle is 49 cm^2 .

Work out the value of x .

Give your answer correct to 3 significant figures.

12 The diagram shows a cuboid $ABCDEFGH$.



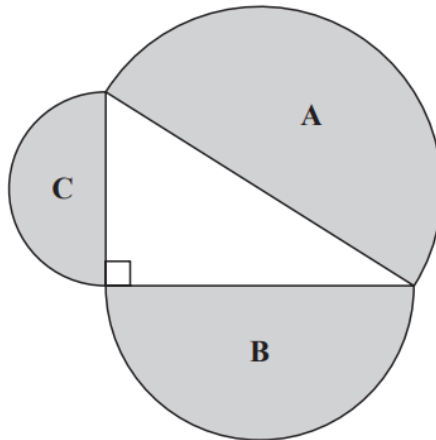
$AB = 7$ cm, $AF = 5$ cm and $FC = 15$ cm.

Calculate the volume of the cuboid.

Give your answer correct to 3 significant figures.

..... cm³

- 13** A right-angled triangle is formed by the diameters of three semicircular regions, **A**, **B** and **C** as shown in the diagram.



Show that

$$\text{area of region A} = \text{area of region B} + \text{area of region C}$$

13 A and B are points on a centimetre grid.

A is the point with coordinates $(-7, 6)$

B is the point with coordinates $(8, -5)$

Work out the length of AB .

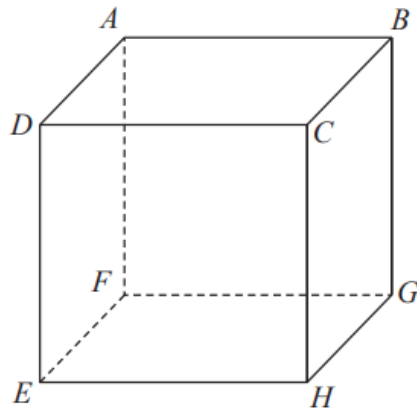
Give your answer correct to 1 decimal place.

..... cm

November 2022 – Paper 2H

(Total for Question 13 is 2 marks)

18 The diagram shows a cube.

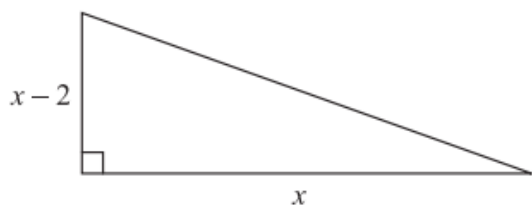


$AH = 11.3$ cm correct to the nearest mm.

Calculate the lower bound for the length of an edge of the cube.
You must show all your working.

..... cm

19 Here is a right-angled triangle.



All measurements are in centimetres.

The area of the triangle is 2.5 cm^2 .

Find the perimeter of the triangle.

Give your answer correct to 3 significant figures.

You must show all of your working.

..... cm