

1. Work out $46 + 17$
(1 mark)2. Work out $135 - 82$
(1 mark)3. Work out 6×36
(1 mark)4. Work out $115 \div 5$
(1 mark)

5. Round 128 to the nearest 10

.....
(1 mark)6. Work out $7 - 15$
(1 mark)7. What is $\frac{1}{4}$ of 16.....
(1 mark)

8. Find 10% of 90

.....
(1 mark)9. Convert $\frac{1}{10}$ to a decimal.....
(1 mark)10. Calculate 5^2
(1 mark)

11. Write down the next two numbers

4, 6, 8, 10,,,

(1 mark)

12. Simplify

 $\frac{8}{10}$
(1 mark)

Name : Class..... Score.....

13. Simplify $h + h + h + h + h$

 (1 mark)

14. Simplify $a \times 6$

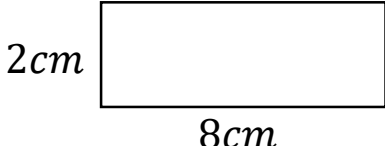
 (1 mark)

15. Expand $3(a + 4)$

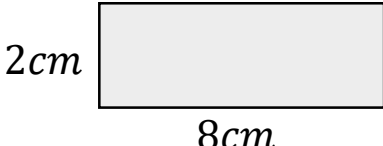
 (2 marks)

16. Write down all the factors of 6

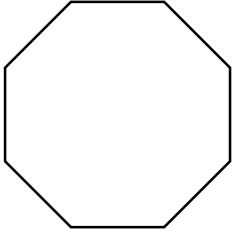
 (1 mark)

17. Calculate the perimeter


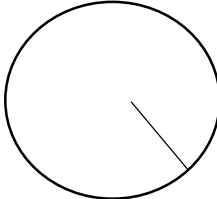
 (1 mark)

18. Calculate the area



 (1 mark)

19. Name this shape


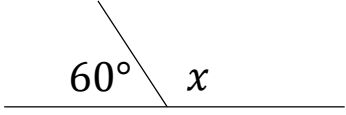
 (1 mark)

20. Name this part of a circle


 (1 mark)

21. Draw all the lines of symmetry


 (1 mark)

22. Calculate x

 $x = \dots\dots\dots$
 (1 mark)

23. Workout
 $10 - 2 \times 3$

 (1 mark)

24. Solve
 $3 \rightarrow \boxed{\times 4} \rightarrow \boxed{+1}$

 (1 mark)