

1. Work out  $56.3 + 5.89$ .....  
(1 mark)2. Work out  $22 - 7.6$ .....  
(1 mark)3. Work out  $0.7 \times 15$ .....  
(2 marks)4. Work out  $\text{£}6.24 \div 3$ .....  
(1 mark)5. Round  $8.2489$  to the nearest 1 dp.....  
(1 mark)6. Work out  $-5 - (-8)$ .....  
(1 mark)7. What is  $\frac{2}{3}$  of 45.....  
(1 mark)

8. Find 25% of 60

.....  
(1 mark)9. Convert  $\frac{3}{4}$  to a decimal.....  
(1 mark)10. Calculate  $11^2 - \sqrt{4}$ .....  
(2 marks)

11. Write down the nth term

 $3, 6, 9, 12, 15$ .....  
(1 mark)

12. Simplify

 $\frac{8}{16}$ .....  
(1 mark)

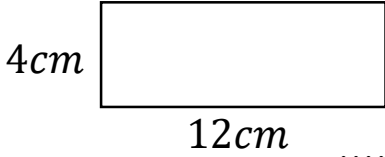
Name : ..... Class..... Score.....

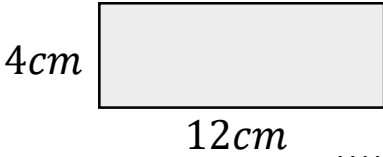
13. Simplify  $6h + 3j - h - 5h$   
 .....  
 (2 marks)


14. Simplify  $4m \times 6m$   
 .....  
 (1 mark)

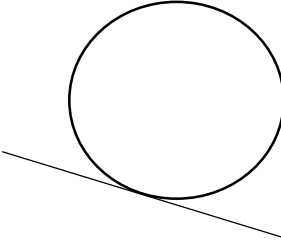
15. Expand  $3(7a + 4)$   
 .....  
 (2 marks)

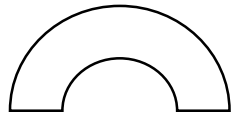
16. Write down all the factors of 26  
 .....  
 (1 mark)

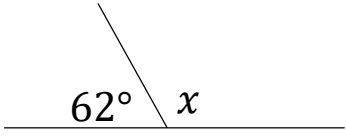
17. Calculate the perimeter  
  
 (1 mark)

18. Calculate the area  
  
 (1 mark)

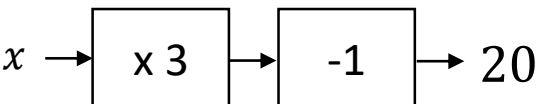
19. Name this shape  
  
 (1 mark)

20. Name this part of a circle  
  
 (1 mark)

21. Draw all the lines of symmetry  
  
 (1 mark)

22. Calculate  $x$   
  
 $x = \dots$   
 (1 mark)

23. Workout  
 $30 \div 5 + 2 \times 6$   
 .....  
 (2 marks)

24. Solve  
  
 $x = \dots$   
 (1 mark)