

1. Work out  $182 + 148$ .....  
(1 mark)2. Work out  $152 - 67$ .....  
(1 mark)3. Work out  $18 \times 31$ .....  
(1 mark)4. Work out  $375 \div 5$ .....  
(1 mark)

5. Round 3487 to the nearest 100

.....  
(1 mark)6. Work out  $-9 + 14$ .....  
(1 mark)7. What is  $\frac{2}{3}$  of 12.....  
(1 mark)

8. Find 40% of 30

.....  
(1 mark)9. Convert  $\frac{7}{10}$  to a decimal.....  
(1 mark)10. Calculate  $10^2 - \sqrt{36}$ .....  
(2 marks)

11. Fill in the missing numbers

 $2, 8, 14, \dots, 26, \dots,$ .....  
(1 mark)

12. Simplify

 $\frac{4}{40}$ .....  
(1 mark)

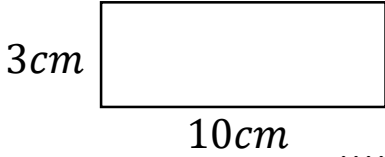
Name : ..... Class..... Score.....

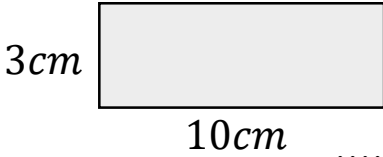
13. Simplify  $3f + 4f + f - 2f$   
 .....  
 (1 mark)

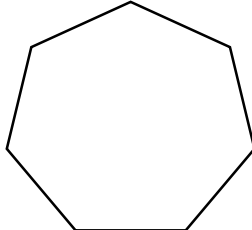
14. Simplify  $4t \times 7$   
 .....  
 (1 mark)

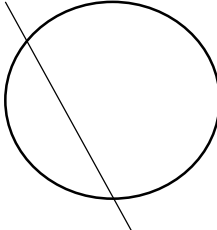
15. Expand  $5(3a - 2)$   
 .....  
 (2 marks)


16. Write down all the factors of 30  
 .....  
 (1 mark)

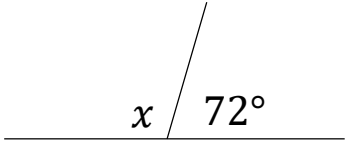
17. Calculate the perimeter  
  
 .....  
 (1 mark)

18. Calculate the area  
  
 .....  
 (1 mark)

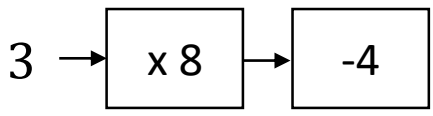
19. Name this shape  
  
 .....  
 (1 mark)

20. Name this part of a circle  
  
 .....  
 (1 mark)

21. Draw all the lines of symmetry  
  
 .....  
 (1 mark)

22. Calculate  $x$   
  
 $x = \dots\dots\dots$   
 (1 mark)

23. Workout  
 $4 + 3 \times 6$   
 .....  
 (1 mark)

24. Solve  
  
 .....  
 (1 mark)