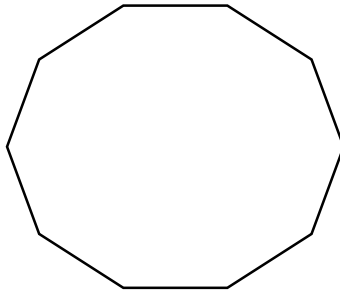

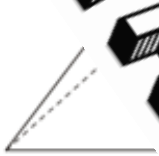


1. Name this polygon.

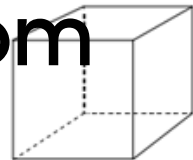


.....
(1 mark)

2.



Available from
my TES
account



Name.....

Name.....

Faces.....

Faces.....

Vertices.....

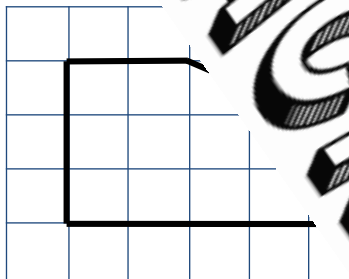
Vertices.....

Edges.....

Edges.....

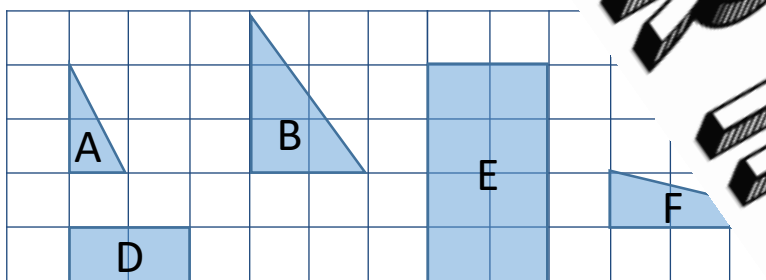
(9 marks)

3. Calculate the area of this shape



.....
(1 mark)

4.

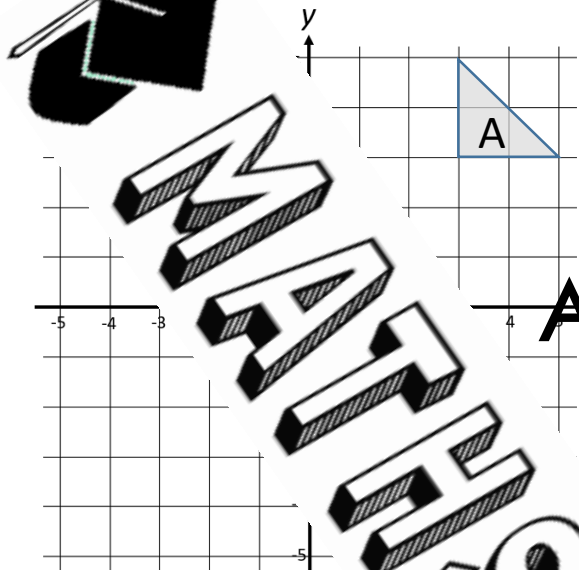


(i) Which two shapes are congruent.

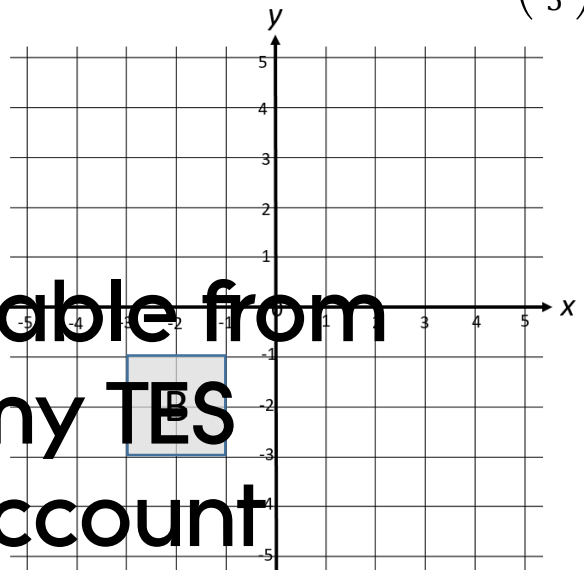
(ii) Which two shapes are similar. and

(2 marks)

5. Reflect shape A in the line $x = 2$



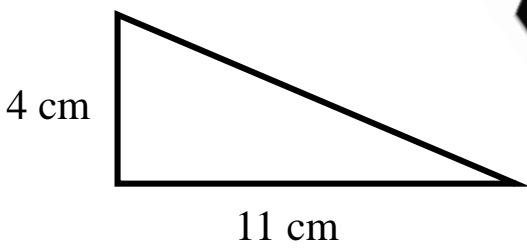
6. Translate shape B by the vector $\begin{pmatrix} -1 \\ 5 \end{pmatrix}$



Available from
my TES
account

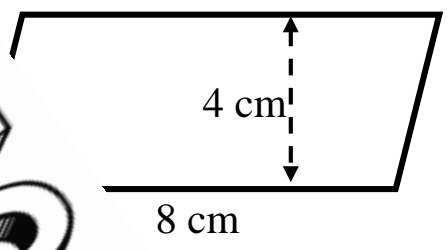
(2 marks)

7. Calculate the area of this shape.



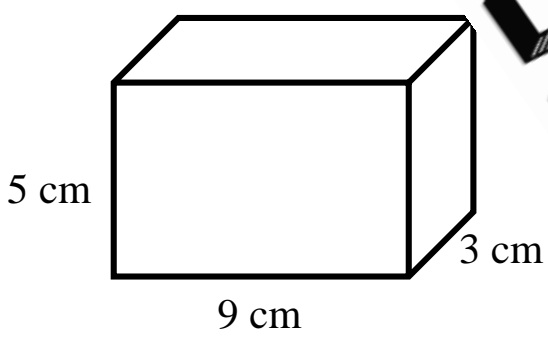
.....
(2 marks)

Calculate the area of this shape.



.....
(2 marks)

9. Calculate the volume and surface area of this cuboid.



Volu.

Surface area :

(3 marks)

Score =